

Capacitors

Student Group

First Name	Surname	Matrikel Nr.

Table of Contents

Capacitors	2
Direct capacitance measurement	2
RC network	4

Capacitors

Direct capacitance measurement

Capacitors are components that allow the storage of electrical energy. In the charged state an electrical charge is present. This charge causes a voltage at the electrical terminals of the capacitor. Build the following circuit on the breadboard with three capacitors, s. [figure 1](#):

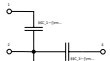


Fig. 1: Capacitors

Measure the capacitance of capacitors C_{1} , C_{2} , C_{3} with the multimeter and enter the measured values in [table 1](#):

C_{1}	C_{2}	C_{3}

Tab. 1: Capacitors

Capacitors can be connected in series and/or in parallel. The total capacitance of two or more capacitors in parallel is calculated as:

$$C_{\text{total}} = C_1 + C_2 + \dots + C_n$$

The total capacitance of capacitors connected in series is calculated as:

$$\frac{1}{C_{\text{total}}} = \frac{1}{C_1} + \frac{1}{C_2} + \dots + \frac{1}{C_n}$$
 Series connection:

- $C_1 + C_2$ (measured between terminals 1 and 3)
- $C_2 + C_3$ (measured between terminals 3 and 4)

Parallel connection:

- $C_1 || C_3$ (measured between terminals 1 and 2; wire bridge between 1 and 4)
- $C_1 || C_2$ (measured between terminals 1 and 2; wire bridge between 1 and 3)

Series/parallel connection:

- $C_1 + (C_2 || C_3)$ (measured between terminals 1 and 3; wire bridge between 3 and 4)

Enter the measured and calculated values in [table 2](#):

Tab. 2: Capacitor meas. vs. calc.

The built-in capacitors have values from the E6 series. The E6 series for capacities is shown below. For the measured capacities from [table 1](#), determine the matching value from the E6 series and calculate the respective measurement deviation from the nominal value in %.

$$\text{Deviation} = \frac{C_{\text{meas}} - C_{\text{nom, E6 series}}}{C_{\text{nom, E6 series}}} \cdot 100\%$$

Enter your results in the spaces provided below.

C_1 (E6) \approx { } (Deviation { } %)

$C_{2(E6)} \approx \{ \text{rm} \} (\{ \text{rm Deviation} \} \{ \backslash \% \}) \$$

$C_{3(E6)} \approx \{ \text{rm} \} (\{ \text{rm Deviation} \} \{ \backslash \% \}) \$$

The E6 series for capacities in table 3:

100 nF	1 μF	10 μF	100 μF
150 nF	1,5 μF	15 μF	150 μF
220 nF	2,2 μF	22 μF	220 μF
330 nF	3.3 μF	33 μF	330 μF
470 nF	4.7 μF	47 μF	470 μF
680 nF	6.8 μF	68 μF	680 μF

Tab. 3: E6 series for capacitors

RC network

The capacitance of a capacitor is defined as the quotient of charge by voltage:

$C = \frac{Q}{U}$

Capacitors must be charged via an electrical source [figure 2](#).

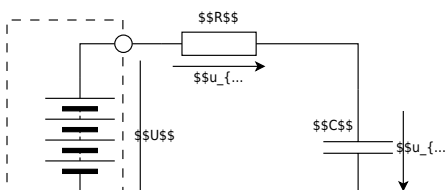


Fig. 2: Capacitor charging

A capacitor charges the faster the smaller the series resistor R is. During charging, the voltage u_C results from a differential equation as:

$$u_{\text{C}}(t) = U \cdot (1 - e^{-\frac{t}{\tau}}), \quad \tau = R \cdot C$$

The constant τ is called the time constant. After this time, the capacitor is charged to approx. 63% . The fundamental equation for the relation between current and voltage at a capacitor is:

$$i_{\text{C}}(t) = C \cdot \frac{du_{\text{C}}}{dt}$$

From the two equations, the current through the capacitor is:

$$i_{\text{C}}(t) = \frac{U}{R} \cdot e^{-\frac{t}{\tau}}$$

The graphical representation of voltage and current during the charging of a capacitor over time is shown in [figure 3](#).



Fig. 3: Voltage/Current in case of charging capacitor

Because of the exponential function, charging is theoretically only complete after an infinitely long time. The capacitor voltage equals 63% U after $1 \cdot \tau$, 86% U after $2 \cdot \tau$, 95% U after $3 \cdot \tau$, 98% U after $4 \cdot \tau$, and 99% U after $5 \cdot \tau$. It is assumed that the capacitor is fully charged after a time span $T = 5 \cdot \tau$ and the voltage across the capacitor has reached U . If the charged capacitor C is discharged through a resistor R , the solution of the differential equation for the voltage is:

$$u_{\text{C}}(t) = U \cdot e^{-\frac{t}{\tau}}$$

For the current accordingly:

$$i_{\text{C}}(t) = -\frac{U}{R} \cdot e^{-\frac{t}{\tau}}$$

Now build the following circuit. Connect the function generator and the oscilloscope to the circuit as shown in [figure 4](#).

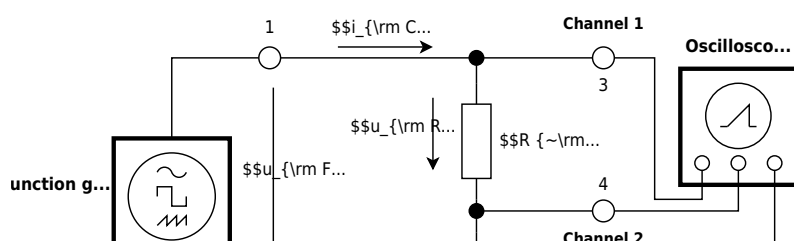


Fig. 4: Circuit with oscilloscope + function generator

Connect the function generator’s ground (black) to point 2 and the signal lead to point 1. For the oscilloscope connection use the BNC-banana adapter; the red socket is the signal input and the black socket is the ground connection to the oscilloscope. Connect Channel 1 to point 3, Channel 2 to point 4, and ground to point 5. You only need to make the ground connection to the oscilloscope once, since the ground lines are connected inside the oscilloscope.

Enter in [table 4](#) both the measured values of the components used and the calculated time constant τ .

Tab. 4: Capacitor meas. + time constant τ

Set the voltage u_{F} generated by the function generator to a unipolar square with amplitude

5 \$V\$ (i.e., no negative signal voltages occur!). The frequency on the function generator must be chosen so that the capacitor just fully charges and then fully discharges again. Calculate the frequency to be set:

$f_1 = \sim \dots$

Sketch the voltages measured with the oscilloscope for u_F , u_C , and u_R in the following screen diagram. Also enter alongside the screen drawings the set $\frac{V}{DIV}$ of the channels and the $\frac{T}{DIV}$ of the time base.

Draw **tangents** in the screen diagram for the start of charging and the start of discharging. What is the charging current or discharging current at the beginning?

\dots

The circuit is now to be operated at higher frequency. Set:

- $f_2 = \sim 10 \cdot f_1$
- $f_3 = \sim 100 \cdot f_1$

Measure the waveforms for u_F , u_C and document the results in the following [table 5](#):

Tab. 5: Voltage curve u_F u_C

Explain your observations for the measurements with f_2 , f_3 :

\dots

\dots

\dots

From:

<https://mexle.te.hs-heilbronn.de/> - **MEXLE Wiki**

Permanent link:

https://mexle.te.hs-heilbronn.de/lab_electrical_engineering/2_capacitors/capacitors?rev=1774129619

Last update: **2026/03/21 22:46**

