

# Photodiode as current source

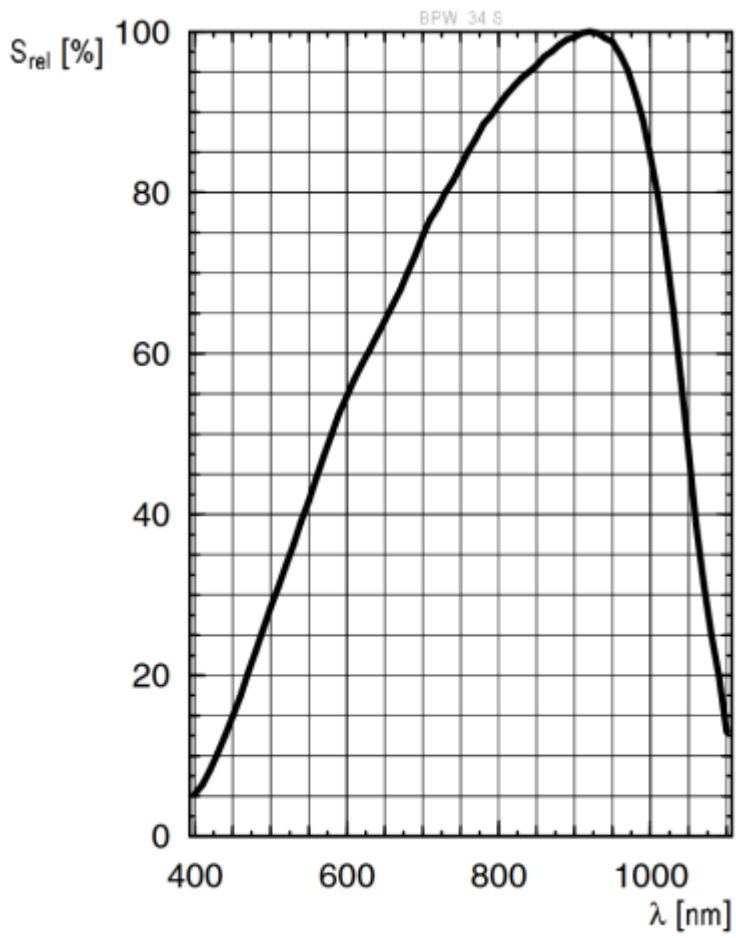
## Student Group

| First Name | Surname | Matrikel Nr. |
|------------|---------|--------------|
|            |         |              |
|            |         |              |
|            |         |              |

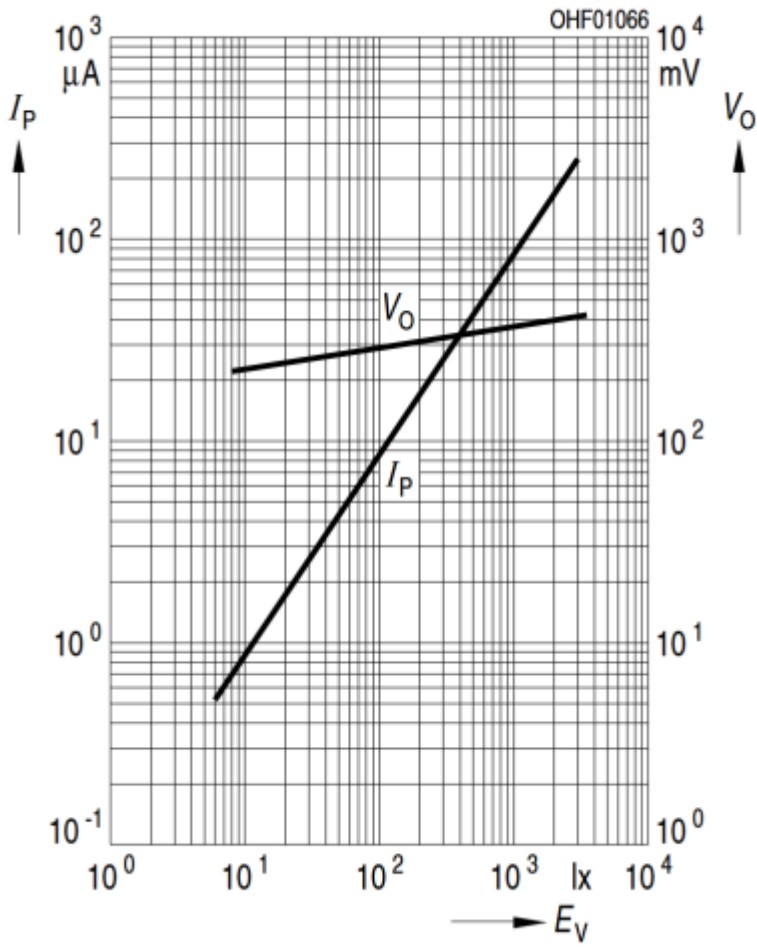
## Table of Contents

Photo Diode as current source ..... 2

### Photo Diode as current source



$$I_P (V_R = 5 \text{ V}) / V_O = f(E_V)$$



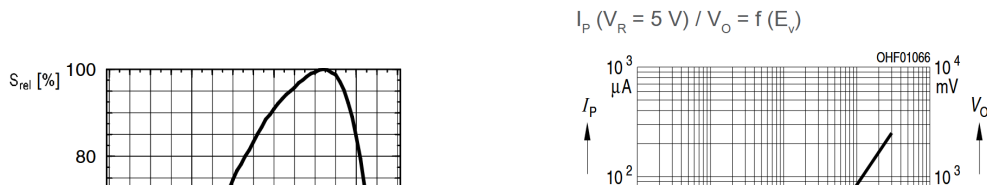


Fig. 2: Inverting Op-Amp: Photo Diode as current source

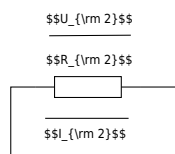


Fig. 3: Inverting Op-Amp: Photo Diode as current source

$$U_{DD} \approx 10\text{V}, U_{SS} \approx -10\text{V}$$

Complete the arrows in the schematic of the circuit.

Take the values for  $U_1, U_2, U_{OUT}$  from figure ##.

Use these values to calculate the sum of the voltages at node  $N_{12}$ .

Compare your result by measurement.

$$U_1 =$$

$$U_2 =$$

$$U_{OUT} =$$

$$\text{Calculated } U_{N_{12}} =$$

$$\text{Measured } U_{N_{12}} =$$

What are your results?

.....

.....

.....

What will happen if you short-circuit  $R_2$ ?

Try it and explain your results.

.....

.....

.....

.....

.....

$\{\rm \dots\}$

$\{\rm \dots\}$

$\{\rm \dots\}$

$\{\rm \dots\}$

$\{\rm \dots\}$

$\{\rm \dots\}$

From:  
<https://mexle.te.hs-heilbronn.de/> - MEXLE Wiki

Permanent link:  
[https://mexle.te.hs-heilbronn.de/lab05\\_en/inverting\\_op-amp\\_photo\\_diode\\_as\\_current\\_source?rev=1776153930](https://mexle.te.hs-heilbronn.de/lab05_en/inverting_op-amp_photo_diode_as_current_source?rev=1776153930)

Last update: **2026/04/14 10:05**

