

Exam Winter Semester 2022

Student Group

First Name	Surname	Matrikel Nr.

Table of Contents

- Exercise E4 Resistance of a Wire by Resistivity (written test, approx. 6 % of a 60-minute written test, WS2022) 3
- Exercise E1 Resistance of a Wire by Resistivity (written test, approx. 6 % of a 60-minute written test, WS2022) 3
- Exercise E1 Temperature-dependent Resistance (written test, approx. 6 % of a 60-minute written test, WS2022) 3
- Exercise E2 Temperature-dependent Resistance (written test, approx. 6 % of a 60-minute written test, WS2022) 4
- Exercise E6 Pure Resistor Network Simplification (written test, approx. 13 % of a 60-minute written test, WS2022) 5
- Exercise E3 Pure Resistor Network Simplification (written test, approx. 13 % of a 60-minute written test, WS2022) 6
- Exercise E1 Equivalent linear Source (written test, approx. 14 % of a 60-minute written test, WS2022) 8
- Exercise E3 Equivalent linear Source (written test, approx. 14 % of a 60-minute written test, WS2022) 12
- Exercise E5 Charging Capacitors (written test, approx. 16 % of a 60-minute written test, WS2022) 16
- Exercise E4 Charging Capacitors (written test, approx. 16 % of a 60-minute written test, WS2022) 17
- Exercise E2 Analyzing complex Impedances (written test, approx. 14 % of a 60-minute written test, WS2022) 19
- Exercise E5 Analyzing complex Impedances (written test, approx. 14 % of a 60-minute written test, WS2022) 19
- Exercise E3 Impedances at different Frequencies (written test, approx. 18 % of a 60-minute written test, WS2022) 20
- Exercise E6 Impedances at different Frequencies (written test, approx. 18 % of a 60-minute written test, WS2022) 20
- Exercise E1 Complex Impedance Circuit (written test, approx. 15 % of a 60-minute written test, WS2022) 20

test, WS2022)	21
Exercise E7 Complex Impedance Circuit (written test, approx. 15 % of a 60-minute written test, WS2022)	24

Exercise E4 Resistance of a Wire by Resistivity (written test, approx. 6 % of a 60-minute written test, WS2022)

A heating element made of solid nichrome wire with a diameter of 1.80 mm is used for electric power dissipation (= heat flow) of $P=40 \text{ W}$ is necessary.

Determine the current I needed to operate for heating elements.

The Nichrome wire has a resistivity of $1.10 \cdot 10^{-6} \text{ } \Omega \cdot \text{m}$.

The heating element is 3 m long and has a diameter of 3.57 mm .

∴ Calculate the resistance R of the heating element.

Solution

$$\begin{aligned} P &= U \cdot I = R \cdot I^2 \quad \rightarrow \quad I = \\ \sqrt{\frac{P}{R}} &= \sqrt{\frac{40 \text{ W}}{0.33 \text{ } \Omega}} \end{aligned}$$

$$\begin{aligned} R &= \rho \cdot \frac{l}{A} \quad | \quad \text{with } A = r^2 \cdot \pi = \\ \frac{1}{4} d^2 \cdot \pi \quad | \quad R &= \rho \cdot \frac{l}{\frac{1}{4} d^2 \cdot \pi} \quad | \quad R = \\ 1.10 \cdot 10^{-6} \text{ } \Omega \cdot \text{m} \cdot \frac{4 \cdot 3 \text{ m}}{(3.57 \cdot 10^{-3} \text{ m})^2 \cdot \pi} \end{aligned}$$

Exercise E1 Resistance of a Wire by Resistivity (written test, approx. 6 % of a 60-minute written test, WS2022)

A heating element made of solid nichrome wire with a diameter of 1.80 mm is used for electric power dissipation (= heat flow) of $P=40 \text{ W}$ is necessary.

Determine the current I needed to operate for heating elements.

The Nichrome wire has a resistivity of $1.10 \cdot 10^{-6} \text{ } \Omega \cdot \text{m}$.

The heating element is 3 m long and has a diameter of 3.57 mm .

∴ Calculate the resistance R of the heating element.

Solution

$$\begin{aligned} P &= U \cdot I = R \cdot I^2 \quad \rightarrow \quad I = \\ \sqrt{\frac{P}{R}} &= \sqrt{\frac{40 \text{ W}}{0.33 \text{ } \Omega}} \end{aligned}$$

$$\begin{aligned} R &= \rho \cdot \frac{l}{A} \quad | \quad \text{with } A = r^2 \cdot \pi = \\ \frac{1}{4} d^2 \cdot \pi \quad | \quad R &= \rho \cdot \frac{l}{\frac{1}{4} d^2 \cdot \pi} \quad | \quad R = \\ 1.10 \cdot 10^{-6} \text{ } \Omega \cdot \text{m} \cdot \frac{4 \cdot 3 \text{ m}}{(3.57 \cdot 10^{-3} \text{ m})^2 \cdot \pi} \end{aligned}$$

Exercise E1 Temperature-dependent Resistance

(written test, approx. 6 % of a 60-minute written test, WS2022)

2. A refrigerator exhibits a temperature coefficient of resistance in a refrigeration system. The refrigerator has a resistance of $10 \text{ k}\Omega$ at 25°C . Its temperature coefficients are: $\alpha = 0.01 \text{ K}^{-1}$ and $\beta = 71 \cdot 10^{-6} \text{ K}^{-2}$.

Result: The temperature inside the refrigeration system can reach down to -40°C .

Calculate the resistance of the thermal resistor at -40°C .

The power transfer resistor P depends on the current and the voltage. Therefore, a solution is to increase the heat flow up the refrigeration system.

Therefore, with constant U and increasing R the power decreases. Ten times more resistance decreases the heat flow to one-tenth.

$$R = R_0 \cdot (1 + \alpha \cdot \Delta T + \beta \cdot \Delta T^2)$$

with $\Delta T = T_{\text{end}} - T_{\text{start}}$

$$R = 10 \text{ k}\Omega \cdot \left(1 + 0.01 \text{ K}^{-1} \cdot (-40^\circ\text{C} - 25^\circ\text{C}) + 71 \cdot 10^{-6} \text{ K}^{-2} \cdot (-40^\circ\text{C} - 25^\circ\text{C})^2\right)$$

Exercise E2 Temperature-dependent Resistance (written test, approx. 6 % of a 60-minute written test, WS2022)

2. A refrigerator exhibits a temperature coefficient of resistance in a refrigeration system. The refrigerator has a resistance of $10 \text{ k}\Omega$ at 25°C . Its temperature coefficients are: $\alpha = 0.01 \text{ K}^{-1}$ and $\beta = 71 \cdot 10^{-6} \text{ K}^{-2}$.

Result: The temperature inside the refrigeration system can reach down to -40°C .

Calculate the resistance of the thermal resistor at -40°C .

The power transfer resistor P depends on the current and the voltage. Therefore, a solution is to increase the heat flow up the refrigeration system.

Therefore, with constant U and increasing R the power decreases. Ten times more resistance decreases the heat flow to one-tenth.

$$R = R_0 \cdot (1 + \alpha \cdot \Delta T + \beta \cdot \Delta T^2)$$

with $\Delta T = T_{\text{end}} - T_{\text{start}}$

$$R = 10 \text{ k}\Omega \cdot \left(1 + 0.01 \text{ K}^{-1} \cdot (-40^\circ\text{C} - 25^\circ\text{C}) + 71 \cdot 10^{-6} \text{ K}^{-2} \cdot (-40^\circ\text{C} - 25^\circ\text{C})^2\right)$$

Exercise E6 Pure Resistor Network Simplification
(written test, approx. 13 % of a 60-minute written test, WS2022)

The following shall be solved at once, $R_2 = R_3 = 100 \Omega$ and the switch shall be open. Calculate the equivalent resistance R_{eq} between A and B .

Solution

$$R_{eq} = 133.8 \Omega$$

Now a wye-delta transformation is necessary.



Since $R_2 = R_3$ and based on the equations for the transformation, the transformed R_Y is given as:

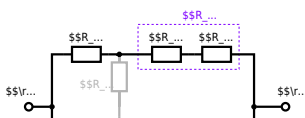
$$R_Y = \frac{R_2 \cdot R_3}{R_2 + R_3} = \frac{100 \cdot 100}{100 + 100} = 50 \Omega$$

The equivalent resistor is given by a parallel configuration of resistors in series:

$$R_{eq} = R_Y + (R_Y + R_1) \parallel (R_Y + R_2) \parallel (R_Y + R_3) \parallel R_4$$

.. The switch shall now be open. Calculate the equivalent resistance R_{eq} between A and B .

Solution



The equivalent resistor is given by a parallel configuration of resistors in series:

$$R_{\text{eq}} = (R_2 + R_1 + R_1) \parallel (R_2 + R_2) \parallel R_{\text{eq}} = (100 \sim\Omega + 200 \sim\Omega + 200 \sim\Omega) \parallel (100 \sim\Omega + 100 \sim\Omega) \parallel R_{\text{eq}} = \{500 \sim\Omega\} \parallel (200 \sim\Omega) \parallel R_{\text{eq}} = \{500 \sim\Omega \cdot 200 \sim\Omega\} \over {500 \sim\Omega + 200 \sim\Omega}$$

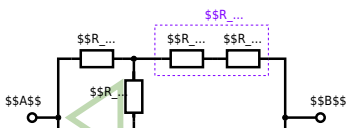
Exercise E3 Pure Resistor Network Simplification (written test, approx. 13 % of a 60-minute written test, WS2022)

The following shall be solved with $R_1 = 200 \Omega$, $R_2 = R_3 = 100 \Omega$ and the switch S is given. R_{eq} is given.

Solution

$$R_{\text{eq}} = 132.8 \Omega$$

Now a wye-delta transformation is necessary.

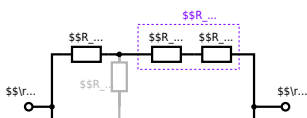


Since $R_2=R_3$ and based on the equations for the transformation, the transformed R_Y is given as:
$$R_Y = \frac{R_2 \cdot R_2}{R_2 + R_2 + R_2} = \frac{(100 \Omega)^2}{3 \cdot 100 \Omega} = \frac{1}{3} \cdot 100 \Omega = 33.33 \Omega$$

The equivalent resistor is given by a parallel configuration of resistors in series:
$$R_{eq} = R_Y + (R_Y + R_1 + R_1) \parallel (R_Y + R_2) \parallel R_{eq} = 33.33 \Omega + (33.33 \Omega + 400 \Omega) \parallel (33.33 \Omega + 100 \Omega)$$

1. The switch shall now be open. Calculate the equivalent resistance R_{eq} between A and B.

Solution



The equivalent resistor is given by a parallel configuration of resistors in series:

$$R_{\text{eq}} = (R_2 + R_1 + R_{-1}) \parallel (R_2 + R_2) \parallel R_{\text{eq}} = (100 \Omega + 200 \Omega + 200 \Omega) \parallel (100 \Omega + 100 \Omega) \parallel R_{\text{eq}} = (500 \Omega) \parallel (200 \Omega) \parallel R_{\text{eq}} = \frac{500 \Omega \cdot 200 \Omega}{500 \Omega + 200 \Omega}$$

**Exercise E1 Equivalent linear Source
(written test, approx. 14 % of a 60-minute written test, WS2022)**

The circuit in the following has to be simplified.
Result

$$U_{\text{s}} = U_{\text{AB}} = 4.5 \text{ V} \quad R_{\text{i}} = R_{\text{AB}} = 6 \Omega$$



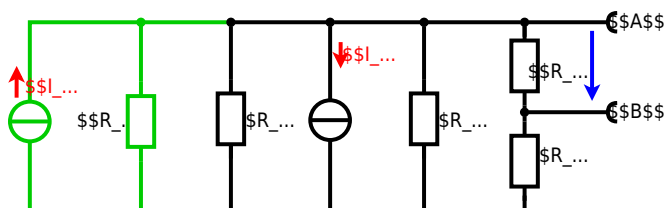
Calculate the internal resistance R_{in} and the source voltage U_{s} of an equivalent linear voltage source on the connectors A and B . $R_1=5.0 \Omega$, $U_2=6.0 \text{ V}$, $R_3=10 \Omega$, $I_4=4.2 \text{ A}$, $R_5=10 \Omega$, $R_6=7.5 \Omega$, $R_7=15 \Omega$. Use equivalent sources in order to simplify the circuit!

Solution

The best thing is to re-think the wiring like rubber bands and adjust them:



The linear voltage source of U_2 and R_1 can be transformed into a current source $I_2 = \frac{U_2}{R_1}$ and R_1 :



Now a lot of them can be combined. The resistors R_1 , R_3 , R_5 are in parallel, like also I_2 and I_4 :

$$R_{135} = R_1 || R_3 || R_5$$

$$I_{24} = I_2 - I_4$$
 The resulting circuit can again be transformed:



Here, the U_{24} is calculated by I_{24} as the following:

$$U_{24} = I_{24} \cdot (R_6 + R_7)$$

$$U_{24} = U_2 \cdot \frac{R_7}{R_6 + R_7 + R_1 \parallel R_3 \parallel R_5} - I_4 \cdot R_1 \parallel R_3 \parallel R_5$$

On the right side of the last circuit, there is a voltage divider given by R_{135} , R_6 , and R_7 .

Therefore the voltage between A and B is given as:

$$U_{AB} = U_{24} \cdot \frac{R_7}{R_6 + R_7 + R_1 \parallel R_3 \parallel R_5} - (U_2 \cdot \frac{R_7}{R_1} - I_4) \cdot \frac{R_7 \cdot R_1 \parallel R_3 \parallel R_5}{R_6 + R_7 + R_1 \parallel R_3 \parallel R_5}$$

For the internal resistance R_i the ideal voltage source is substituted by its resistance ($=0\Omega$, so a short-circuit):

$$R_{AB} = R_7 \parallel (R_6 + R_1 \parallel R_3 \parallel R_5)$$

with $R_1 \parallel R_3 \parallel R_5 = 5\Omega \parallel 10\Omega \parallel 10\Omega = 5\Omega \parallel 5\Omega = 2.5\Omega$:

$$U_{AB} = \frac{6.0\text{V}}{5.0\Omega} - 4.2\Omega \cdot \frac{15\Omega \cdot 2.5\Omega}{7.5\Omega + 15\Omega + 2.5\Omega} \parallel R_{AB} = 15\Omega \parallel (7.5\Omega + 2.5\Omega)$$

Exercise E3 Equivalent linear Source (written test, approx. 14 % of a 60-minute written test, WS2022)

The circuit in the following has to be simplified.
Result

$$U_s = U_{AB} = 4.5\text{V} \parallel R_i = R_{AB} = 6\Omega$$



Calculate the internal resistance R_{int} and the source voltage U_s of an equivalent linear voltage source on the connectors A and B .
 $R_1=5.0 \Omega$, $U_2=6.0 \text{ V}$, $R_3= 10 \Omega$, $I_4=4.2 \text{ A}$,
 $R_5=10 \Omega$, $R_6=7.5 \Omega$, $R_7=15 \Omega$ Use equivalent sources in order to simplify the circuit!

Solution

The best thing is to re-think the wiring like rubber bands and adjust them:



The linear voltage source of U_2 and R_1 can be transformed into a current source $I_2 = \frac{U_2}{R_1}$ and R_1 :



Now a lot of them can be combined. The resistors R_1 , R_3 , R_5 are in parallel, like also I_2 and I_4 :

$$R_{135} = R_1 || R_3 || R_5$$

$$I_{24} = I_2 - I_4$$

The resulting circuit can again be transformed:



Here, the U_{24} is calculated by I_{24} as the following:

$$U_{24} = I_{24} \cdot R_{67}$$

$$U_{AB} = U_{24} \cdot \frac{R_7}{R_6 + R_7 + R_1 || R_3 || R_5} - I_4 \cdot R_1 || R_3 || R_5$$

On the right side of the last circuit, there is a voltage divider given by R_{135} , R_6 , and R_7 .

Therefore the voltage between A and B is given as:

$$U_{AB} = U_{24} \cdot \frac{R_7}{R_6 + R_7 + R_1 || R_3 || R_5} - (U_2 \cdot \frac{R_7}{R_1} - I_4) \cdot R_1 || R_3 || R_5$$

For the internal resistance R_i the ideal voltage source is substituted by its resistance ($=0 \Omega$, so a short-circuit):

$$R_{AB} = R_7 || (R_6 + R_1 || R_3 || R_5)$$

with $R_1 || R_3 || R_5 = 5 \Omega || 10 \Omega || 10 \Omega = 5 \Omega || 5 \Omega = 2.5 \Omega$:

$$U_{AB} = \frac{6.0 \text{ V}}{5.0 \Omega} - 4.2 \Omega \cdot \frac{15 \Omega \cdot 2.5 \Omega}{7.5 \Omega + 15 \Omega + 2.5 \Omega}$$

$$R_{AB} = 15 \Omega || (7.5 \Omega + 2.5 \Omega)$$

Exercise E5 Charging Capacitors
 (written test, approx. 16 % of a 60-minute written test, WS2022)

The circuit below is a RC circuit consisting of a DC voltage source U , a resistor R_1 , a resistor R_2 , and a capacitor C . The switch S_1 is initially open. The voltage across the capacitor is again 0 V at the moment $t_0 = 0 \text{ s}$ when the switch S_1 is closed. Calculate the voltage $u_c(t_2)$ across the capacitor at $t_2 = 1 \text{ ms}$ after closing the switch.

Solution: To solve this, first create an equivalent linear voltage source from U , R_1 , and R_2 .

The ideal voltage source U_{eq} is given by:

$$U_{eq} = U \cdot \frac{R_2}{R_1 + R_2}$$

On an alternative view, one can try to create an equivalent linear voltage source again. Then, the internal resistance is given by substituting the ideal voltage source is again short-circuiting R_2 .



The circuit contains a voltage source $U=12\text{ V}$, a switch S_1 , a resistor of $R_1=20\text{ }\Omega$ and a capacitor of $C=100\text{ }\mu\text{F}$. The switch S_2 to an additional consumer R_2 will be considered to be open for the first task. At the moment $t_0=0\text{ s}$ the switch S_1 is closed, the voltage across the capacitor is $u_c(t_0)=0\text{ V}$.



First do not consider the light bulb - it is not connected to the RC circuit. Calculate the point of time t_1 when $u_c(t_1)=0.5 \cdot U$.

Solution



So, here only R_1 and C gives the time constant: $\tau = R_1 \cdot C$

The following formula describes the time course of $u_c(t)$ which has to be $u_c(t_1)=0.5 \cdot U$:

$$u_c(t) = U \cdot (1 - e^{-t/\tau}) = 0.5 \cdot U$$
 It has to be rearranged to $(1 - e^{-t/\tau}) = 0.5$.
 An equivalent linear voltage source can be given with U_s , R_1 and R_B as seen in yellow:

$$U_s = U \cdot \frac{R_B}{R_1 + R_B} = \frac{1}{2} \cdot U$$
 The internal resistance is given by substituting the ideal voltage source with its resistance ($r=0\text{ }\Omega$, short-circuit).

$$R_i = R_1 \parallel R_B = 10\text{ }\Omega$$

Therefore, the voltage of the equivalent linear voltage source is:

$$u_c(t_2) = U_s \cdot (1 - e^{-t_2/(R_i \cdot C)}) = \frac{1}{2} \cdot U \cdot (1 - e^{-1\text{ ms}/(10\text{ }\Omega \cdot 100\text{ }\mu\text{F})})$$

Exercise E4 Charging Capacitors
 (written test, approx. 16 % of a 60-minute written test, WS2022)

The circuit (as shown in the figure) consists of a DC voltage source $U=6\text{ V}$, a resistor $R_1=20\text{ }\Omega$, a capacitor $C=20\text{ }\mu\text{F}$ and a light bulb $R_B=20\text{ }\Omega$. The switch S_1 is open. The voltage across the capacitor is again 0 V at the moment $t_0=0\text{ s}$ when the switch S_1 is closed. Calculate the voltage $u_c(t_2)$ across the capacitor at $t_2=1\text{ ms}$ after closing the switch.

Solution To solve this, first create an equivalent linear voltage source from U , R_1 , and R_B .

$$U_s = U \cdot \frac{R_B}{R_1 + R_B} = \frac{3}{3} \cdot U = U = 6\text{ V}$$

$$R_i = R_1 \parallel R_B = 10\text{ }\Omega$$

Solution

The ideal voltage source is $U = 12 \text{ V}$. The internal resistance is given by substituting the ideal voltage source is again short-circuiting R_2 .

On an alternative view, one can try to create an equivalent linear voltage source again. Then, the internal resistance is given by substituting the ideal voltage source is again short-circuiting R_2 .



The circuit contains a voltage source $U = 12 \text{ V}$, a switch S_1 , a resistor of $R_1 = 20 \Omega$ and a capacitor of $C = 100 \mu\text{F}$.

The switch S_2 to an additional consumer R_2 will be considered to be open for the first asks. At the moment $t_0 = 0$ the switch S_1 is closed, the voltage across the capacitor is $u_c(t_0) = 0 \text{ V}$.

First do not consider the light bulb - it is not connected to the RC circuit.

Calculate the point of time t_1 when $u_c(t_1) = 0.5 \cdot U$.



Solution

An equivalent linear voltage source can be given with U_s , R_1 , and R_B as seen in yellow.

Therefore, the voltage of the equivalent linear voltage source is: $U_s = U \cdot \frac{R_B}{R_1 + R_B} = \frac{1}{2} \cdot U$. The internal resistance is given by substituting the ideal voltage source with its resistance ($R = 0 \Omega$, short-circuit). $R_i = R_1 \parallel R_B = 10 \Omega$

$$u_c(t_2) = U_s \cdot (1 - e^{-t_2/(R_i \cdot C)}) = \frac{1}{2} \cdot U \cdot (1 - e^{-t_2/(10 \text{ ms} / (10 \Omega \cdot 100 \mu\text{F}))})$$

So, here only R_1 and C gives the time constant: $\tau = R_1 \cdot C$

The following formula describes the time course of $u_c(t)$ which has to be $u_c(t_1) = 0.5 \cdot U$: $u_c(t) = U \cdot (1 - e^{-t/\tau}) = 0.5 \cdot U$. It has to be rearranged to $(1 - e^{-t/\tau}) = 0.5 \implies e^{-t/\tau} = 0.5 \implies t/\tau = \ln(0.5) \implies t = \tau \cdot \ln(0.5) = R_1 \cdot C \cdot \ln(0.5)$

Exercise E2 Analyzing complex Impedances (written test, approx. 14 % of a 60-minute written test, WS2022)

2. Given that the phasor voltage $\underline{u}(t) = 50 \cos(300t - 10^\circ)$ V and the phasor current $\underline{i}(t) = 0.24 \cos(300t + 20^\circ)$ A are both through the components (R and X_L) shall be given.

After analysis, the full bandwidth of the circuit impedance Z can be extracted and the phase angle φ in phase with the voltage $\underline{u}(t) = 50 \cos(300t + 20^\circ)$ V shall be given.

Solution
.. Calculation of the physical values of the two components.
Solution
$$R = \frac{U}{I} = \frac{50}{0.24} = 208.33 \Omega$$

Solution

$$\underline{I} = \frac{\underline{U}}{\underline{Z}} \Leftrightarrow \underline{Z} = \frac{\underline{U}}{\underline{I}} = \frac{50 \angle -10^\circ}{0.24 \angle 20^\circ} = 208.33 \angle -30^\circ \Omega$$

The voltage $\underline{u}(t) = 50 \cos(300t - 10^\circ)$ V is the reference phasor. The resulting impedance $\underline{Z} = 208.33 \angle -30^\circ \Omega$ is the sum of a resistor R and an inductor X_L .

Therefore, the component R is $R = 208.33 \cos(-30^\circ) = 180.9 \Omega$ and the component X_L is $X_L = 208.33 \sin(-30^\circ) = -104.17 \Omega$.

The phase angle φ is $\varphi = \arg(\underline{Z}) = -30^\circ$. The phase angle φ is the angle between the voltage $\underline{u}(t)$ and the current $\underline{i}(t)$.

With the complex part $\cos(300t - 10^\circ)$ as reference, the phase angle φ is $\varphi = \arg(\underline{Z}) = -30^\circ$.

The phase angle φ can be calculated as $\varphi = \arctan\left(\frac{\text{Im}(\underline{Z})}{\text{Re}(\underline{Z})}\right) = \arctan\left(\frac{-104.17}{180.9}\right) = -30^\circ$.

The phase angle φ is $\varphi = -30^\circ$.

Exercise E5 Analyzing complex Impedances (written test, approx. 14 % of a 60-minute written test, WS2022)

2. Given that the phasor voltage $\underline{u}(t) = 50 \cos(300t - 10^\circ)$ V and the phasor current $\underline{i}(t) = 0.24 \cos(300t + 20^\circ)$ A are both through the components (R and X_L) shall be given.

After analysis, the full bandwidth of the circuit impedance Z can be extracted and the phase angle φ in phase with the voltage $\underline{u}(t) = 50 \cos(300t + 20^\circ)$ V shall be given.

Solution
.. Calculation of the physical values of the two components.
Solution
$$R = \frac{U}{I} = \frac{50}{0.24} = 208.33 \Omega$$

Solution

$$\underline{I} = \frac{\underline{U}}{\underline{Z}} \Leftrightarrow \underline{Z} = \frac{\underline{U}}{\underline{I}} = \frac{50 \angle -10^\circ}{0.24 \angle 20^\circ} = 208.33 \angle -30^\circ \Omega$$

The voltage $\underline{u}(t) = 50 \cos(300t - 10^\circ)$ V is the reference phasor. The resulting impedance $\underline{Z} = 208.33 \angle -30^\circ \Omega$ is the sum of a resistor R and an inductor X_L .

Therefore, the component R is $R = 208.33 \cos(-30^\circ) = 180.9 \Omega$ and the component X_L is $X_L = 208.33 \sin(-30^\circ) = -104.17 \Omega$.

The absolute value of the impedance is $Z = \sqrt{R^2 + (X_L - X_C)^2}$ and the phase angle is $\phi = \arctan\left(\frac{X_L - X_C}{R}\right)$.
 With the complex part comes the physical value: $X_L = \omega L$ and $X_C = \frac{1}{\omega C}$.
 The phase angle is $\phi = \arctan\left(\frac{4.68 \sim \Omega}{0.24 \sim \Omega}\right) = 10.8^\circ$.

Exercise E3 Impedances at different Frequencies
 (written test, approx. 18 % of a 60-minute written test, WS2022)

At a series circuit with $R_1 = 1.00 \sim \Omega$, $R_2 = 4.70 \sim \mu\text{H}$, and $C = 40 \sim \text{nF}$ at $f = 4 \sim \text{MHz}$.
 Result: $Z = 1.00 \sim \Omega$.
 A resistor R_1 shall have the same absolute value of the impedance as a capacitor $C_1 = 40 \sim \text{nF}$ at $f_1 = 4 \sim \text{MHz}$.

Solution
 Solution $R_1 = 1.00 \sim \Omega$
 Solution $R_2 = 4.70 \sim \mu\text{H}$
 A series circuit means that the current is constant on every component.
 The equivalent impedance for R and L combined is given by $Z = \sqrt{R^2 + X_L^2}$.
 Parallel circuit means that the voltage is the same on R_2 and C_1 .
 The equivalent impedance for R_2 and C_1 combined is given by $Z_{parallel} = \frac{R_2 \cdot X_C}{R_2 + X_C}$.
 Since $X_C = \frac{1}{\omega C}$ and $X_L = \omega L$, we have $X_C = \frac{1}{2\pi \cdot 4 \cdot 10^6 \cdot 40 \cdot 10^{-9}} = 0.995 \sim \Omega$.
 Therefore, the resulting current of the parallel circuit is given as:
 $I_{parallel} = \frac{U}{Z_{parallel}} = \frac{U}{\frac{R_2 \cdot X_C}{R_2 + X_C}} = U \cdot \frac{R_2 + X_C}{R_2 \cdot X_C}$.
 This current is the same as the current through R_1 , so $I_{total} = I_{parallel} = I_{R1}$.
 Back to the first formula: $R_3 \cdot I_{total} = X_{C3} \cdot I_{total}$.
 $R_3 = X_{C3} = \frac{1}{\omega C_3} = \frac{1}{2\pi \cdot 4 \cdot 10^6 \cdot C_3} = 1.00 \sim \Omega$.

Exercise E6 Impedances at different Frequencies
 (written test, approx. 18 % of a 60-minute written test, WS2022)



Exercise E7 Complex Impedance Circuit
(written test, approx. 15 % of a 60-minute written test, WS2022)

1. Calculate the current $i(t)$ through the resistor R in the circuit shown in Fig. 1. The voltage source is $u(t) = 3.0 \cdot \sin(2\pi \cdot 15 \cdot t)$ V. The circuit consists of a resistor $R = 10 \Omega$, an inductor $L = 330 \mu\text{H}$, and a capacitor $C = 0.22 \mu\text{F}$, all in series.

Result: $Z = 19.8 \Omega$

Draw the circuit diagram of the given circuit. Label all components, voltages, and currents.

$$Z = \frac{U}{I} \quad I = \frac{U}{Z} \quad Z_C = \frac{1}{2\pi \cdot f \cdot C} = \frac{1}{2\pi \cdot 15 \cdot 0.22 \cdot 10^{-6}} \approx 391.5 \Omega$$

$$Z_L = 2\pi \cdot f \cdot L = 2\pi \cdot 15 \cdot 330 \cdot 10^{-6} \approx 0.314 \Omega$$

$$Z = \sqrt{R^2 + (Z_L - Z_C)^2} = \sqrt{10^2 + (0.314 - 391.5)^2} \approx 391.5 \Omega$$

$$I = \frac{U}{Z} = \frac{3.0}{391.5} \approx 0.00766 \text{ A} = 7.66 \text{ mA}$$

$$i(t) = 7.66 \cdot \sin(2\pi \cdot 15 \cdot t - \phi) \text{ A}$$

$$\underline{Z} = R + j(Z_L - Z_C) = 10 + j(0.314 - 391.5) \approx 10 - j391.2 \Omega$$

$$|\underline{Z}| = \sqrt{R^2 + (Z_L - Z_C)^2} = \sqrt{10^2 + 391.2^2} \approx 391.5 \Omega$$

$$\phi = \arctan\left(\frac{Z_L - Z_C}{R}\right) = \arctan\left(\frac{0.314 - 391.5}{10}\right) \approx -89.9^\circ$$

$$i(t) = \frac{3.0}{391.5} \cdot \sin(2\pi \cdot 15 \cdot t - 89.9^\circ) \text{ A}$$

$$i(t) \approx 7.66 \text{ mA} \cdot \sin(2\pi \cdot 15 \cdot t - 89.9^\circ)$$

$$i(t) \approx 7.66 \text{ mA} \cdot \cos(2\pi \cdot 15 \cdot t)$$

$$i(t) \approx 7.66 \text{ mA} \cdot \cos(2\pi \cdot 15 \cdot t)$$

$$i(t) \approx 7.66 \text{ mA} \cdot \cos(2\pi \cdot 15 \cdot t)$$

$$i(t) \approx 7.66 \text{ mA} \cdot \cos(2\pi \cdot 15 \cdot t)$$

$$i(t) \approx 7.66 \text{ mA} \cdot \cos(2\pi \cdot 15 \cdot t)$$

$$i(t) \approx 7.66 \text{ mA} \cdot \cos(2\pi \cdot 15 \cdot t)$$

$$i(t) \approx 7.66 \text{ mA} \cdot \cos(2\pi \cdot 15 \cdot t)$$

$$i(t) \approx 7.66 \text{ mA} \cdot \cos(2\pi \cdot 15 \cdot t)$$

$$i(t) \approx 7.66 \text{ mA} \cdot \cos(2\pi \cdot 15 \cdot t)$$

$$i(t) \approx 7.66 \text{ mA} \cdot \cos(2\pi \cdot 15 \cdot t)$$



From:
<https://mexle.te.hs-heilbronn.de/> - **MEXLE Wiki**

Permanent link:
https://mexle.te.hs-heilbronn.de/electrical_engineering_1/ws2022_exam?rev=1680365940

Last update: **2023/04/01 18:19**

